


Centre Number						Candidate Number				
Surname										
Other Names										
Candidate Signature										

For Examiner's Use	
Examiner's Initials	
Pages	Mark
3	
4 – 5	
6 – 7	
8 – 9	
10 – 11	
TOTAL	

GCSE Mathematics (Non-calculator Paper)

Practice Paper Style Questions – Topic: Algebra (Foundation Tier)

<p>For this paper you must have:</p> <ul style="list-style-type: none"> • black pen • HB pencil • ruler (with cm & mm) • rubber • protractor • compass • pencil sharpener 	
---	---

Time allowed

- 1 hour

Instructions

- Use **black ink** or black ball-point pen. Draw diagrams in pencil.
- Fill in the boxes at the top of this page.
- Answer **all** questions.
- You must answer the questions in the space provided. Do not write outside the box around each page or on blank pages.
- Do all rough work in this book. Cross through any work that you do not want to be marked.

Information

- The marks for questions are shown in brackets.
- The maximum mark for this paper is **57**.
The quality of your written communication is specifically assessed in questions indicated with an asterisk (*)
- You may ask for more answer paper and graph paper.
These must be tagged securely to this answer booklet.
- A calculator must NOT be used.

Advice

- Read each question carefully before you answer it.
- In all calculations, show clearly how you work out your answer.
- Check your answers if you have time at the end.

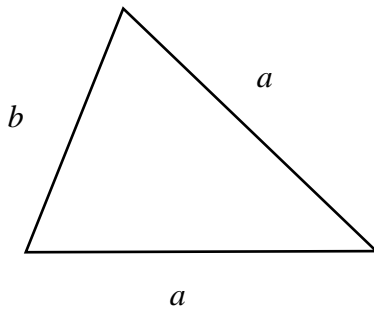
There are no questions printed on this page

**DO NOT WRITE ON THIS PAGE
ANSWER IN THE SPACES PROVIDED**

- 1 (a) Paul thinks of a number.
He multiplies the number by 4
He then adds 3
His answer is 31
What number did Paul think of?

Answer (2 marks)

- (b) Jo uses the formula $P = 2a + b$ to find the perimeter P of this triangle.



Find the value of P when $a = 6$ and $b = 4$

Answer (2 marks)

2 (a) Work out the value of

(i) 8^2

Answer (1 mark)

(ii) $\sqrt{81}$

Answer (1 mark)

(iii) 4×3^3

Answer (1 mark)

2 (b) Work out

(i) $-5 + 7$

Answer (1 mark)


(ii) $-3 - 4$

Answer (1 mark)

3 The cost of hiring a minibus can be worked out using this rule:

$$\text{Cost} = \text{£}120 + 50\text{p per mile}$$

Paul hires a minibus for his cricket team and drives 150 miles.



(a) Work out the cost.

Answer£..... (2 marks)

The total cost of hiring a minibus and driving m miles is T pounds.

(b) Complete the formula for T in terms of m

Answer $T =$ (2 marks)

4 (a) Complete this table of values for:

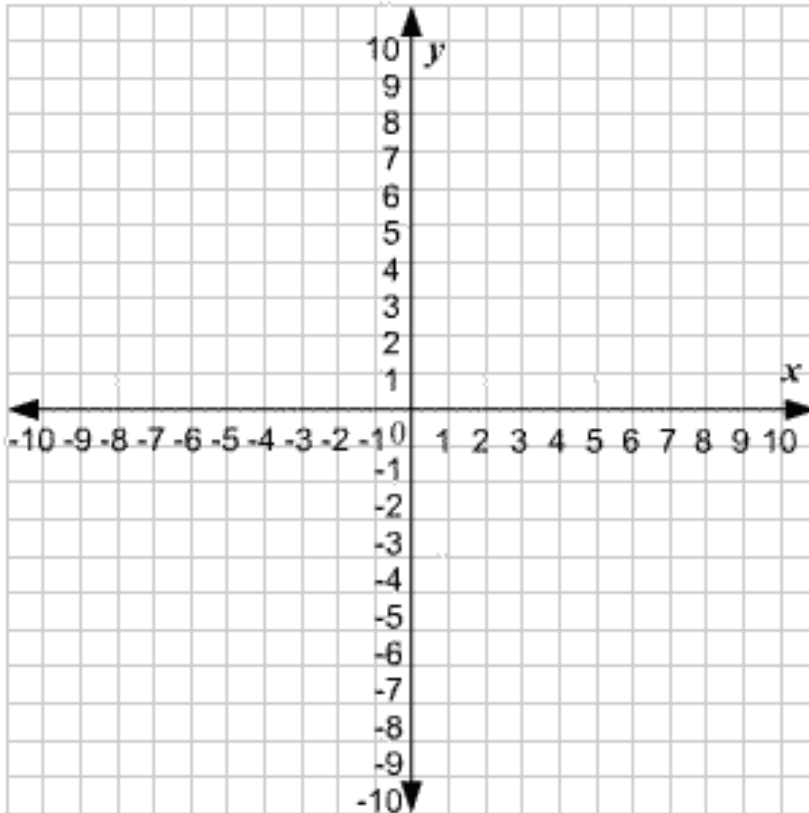
$$y = 3x - 2$$

x	-2	-1	0	1	2	3
y		-5		1	4	

(2 marks)

(b) On the grid, draw the graph of:

$$y = 3x - 2$$



(2 marks)

5 Work out an estimate for:

$$\frac{19 \times 3.94}{0.41}$$

Answer (3 marks)

6 (a) Expand $x(3x + 2)$

Answer (1 mark)

(b) Factorise $y^2 - 3y$

Answer (2 marks)

(c) a is an integer such that $-3 < a \leq 2$

List all the possible values of a

Answer (2 marks)

7 (a) Factorise $x^2 - 7x$

Answer (2 marks)

(b) Expand $2(4y - 3)$

Answer (1 mark)

8 A football club has 75 members.

30 of the members are female.

a) Work out 30 out of 75 as a percentage.

Answer
(2 marks)

60% of the 30 female members are married.

b) Write the number of female members who are married as a fraction of the 75 members.

Give your answer in its simplest form.

Answer
(4 marks)

9 (a) Simplify $6x - 4x$

Answer (1 mark)

(b) Simplify $y \times y \times y \times y$

Answer (1 mark)

(c) Simplify $3y + 5x - 2x + 3x$

Answer (2 marks)

10 The two-way table gives some information about how 100 people travelled to work one day.

	Walk	Car	Bike	Total
Male	25		12	63
Female		9		
Total	38			100

(a) Complete the two-way table

(3 marks)

(b) One of the people is picked at random.

Write down the probability that this person cycled to work that day.

Answer (1 mark)

(c) One of the females is picked at random.

Write down the probability that this female did **not** cycle to work that day.

Answer (2 marks)

- 11** Tomatoes cost t pence each.
Cucumbers cost c pence each.
Write down an expression for the total cost, in pence, of 5 tomatoes and 2 cucumbers.

Answer (2 marks)

- 12** The diagram shows a rectangle.
All measurements are in centimetres.

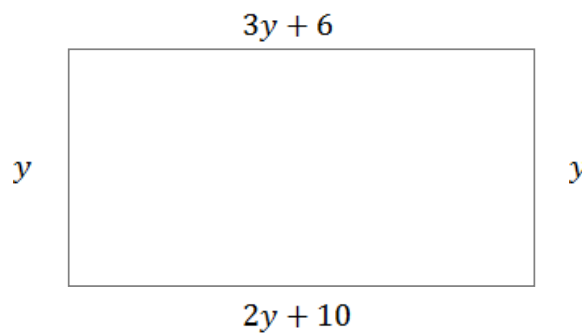


Diagram
NOT drawn
to scale

- (a)** Explain why $3y + 6 = 2y + 10$

..... (1 mark)

- (b)** Solve $3y + 6 = 2y + 10$

Answer $y =$ (2 marks)

- (c)** Use your answer to part (b) to work out the perimeter of the rectangle.

Answercm..... (2 marks)

13 (a) Simplify $8ab - 3ab + 2ab$

Answer (1 mark)

(b) Simplify $5a - 4b + 2a + 2b$

Answer (2 marks)

(c) Simplify $a \times a \times a$

Answer (1 mark)

(d) Simplify $2a \times 3b$

Answer (1 mark)

(e) Factorise $2p + 8$

Answer (1 mark)

END OF QUESTIONS

There are no questions printed on this page

**DO NOT WRITE ON THIS PAGE
ANSWER IN THE SPACES PROVIDED**

