

OCR

Oxford Cambridge and RSA

Thursday 4 June 2015 – Afternoon

GCSE DESIGN AND TECHNOLOGY Industrial Technology

A545/01 Sustainability and Technical Aspects of Designing and Making

Candidates answer on the Question Paper.

OCR supplied materials:

None

Other materials required:

None

Duration: 1 hour 30 minutes



Candidate forename		Candidate surname	
-----------------------	--	----------------------	--

Centre number						Candidate number				
---------------	--	--	--	--	--	------------------	--	--	--	--

INSTRUCTIONS TO CANDIDATES

- Write your name, centre number and candidate number in the boxes above. Please write clearly and in capital letters.
- Use black ink. HB pencil may be used for graphs and diagrams only.
- Answer **all** the questions in Section A **and** Section B.
- Read each question carefully. Make sure you know what you have to do before starting your answer.
- Write your answer to each question in the space provided. Additional paper may be used if necessary but you must clearly show your candidate number, centre number and question number(s).
- Do **not** write in the bar codes.

INFORMATION FOR CANDIDATES

- The number of marks is given in brackets [] at the end of each question or part question.
- The total number of marks for this paper is **80**.
- All dimensions are in millimetres unless stated otherwise.
- The quality of your written communication will be taken into account in marking your answers to the questions marked with an asterisk (*).
- This document consists of **16** pages. Any blank pages are indicated.

SECTION A

Answer **all** the questions.

You are advised to spend 40 minutes on this section.

On questions 1–5 **circle** your answer.

1 Primary recycling means that:

- (a) Products are used again
- (b) Products are reprocessed into new materials
- (c) Product parts are separated before recycling
- (d) Products are buried in landfill sites

[1]

2 Environmentally friendly energy sources are known as:

- (a) Hybrid energy
- (b) Nuclear energy
- (c) Green energy
- (d) Non-renewable energy


[1]

3 Packaging:

- (a) Ensures that a product is low cost
- (b) Is good for the environment
- (c) Protects a product
- (d) Saves energy

[1]

4 The symbol shown means:



- (a) Plastic recycling station
- (b) Plastic systems
- (c) Polystyrene
- (d) Polyvinyl section

[1]

5 When exposed to temperature change, thermochromic materials:

- (a) Case harden
- (b) Change colour
- (c) Change shape
- (d) Work harden

[1]

6 Name **one** renewable source of energy.

..... [1]

7 State the full name of the plastic PVC.

..... [1]

8 State the term used to describe a business with poor working conditions.

..... [1]

9 Name the 6R which describes when a consumer decides not to buy a product.

..... [1]

10 State the term used to measure the impact of our actions on the environment.

..... [1]

Decide whether the statements below are **True** or **False**.

Tick (✓) the box to show your answer.

	True	False	
11 Biodegradable products harm the environment	<input type="checkbox"/>	<input type="checkbox"/>	[1]
12 Polypropylene cannot be recycled	<input type="checkbox"/>	<input type="checkbox"/>	[1]
13 Oil is a renewable source of energy	<input type="checkbox"/>	<input type="checkbox"/>	[1]
14 Risk assessment identifies dangerous situations in the workplace	<input type="checkbox"/>	<input type="checkbox"/>	[1]
15 Insulating homes reduces energy consumption	<input type="checkbox"/>	<input type="checkbox"/>	[1]

16 Fig. 1 shows a bicycle with a frame made of laminated wood.



Fig. 1

(a) Give **three** benefits to the environment of a laminated wood frame compared to a traditional steel frame.

1

.....

2

.....

3

.....

[3]

(b) The bicycle is manufactured by an ethical company.

Explain what is meant by the term 'ethical company'.

.....

.....

.....

.....

.....

[3]

- (d) Fig. 2 shows a dynamo which generates electricity for powering the lights on the bicycle when the front wheel is rotated.




Fig. 2

Use sketches and notes to show how the dynamo could be attached to the bicycle fork.

Your design should:

- Clamp the dynamo securely to the fork
- Allow the dynamo to be quickly removed from the fork
- Be made of a named recyclable material.

(e) Give **two** ways in which a dynamo powered bicycle light is more eco-friendly than one that is battery powered.

1

.....

2

.....

[2]

(f) The dynamo is designed so that it can be disassembled.

Explain why this helps the dynamo to be easily recycled.

.....

.....

.....

.....

[2]

Section B

Answer **all** the questions.

You are advised to spend 50 minutes on this section.

17 Most tools are made from ferrous metals.

(a) Name **two** ferrous metals.

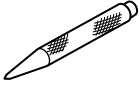

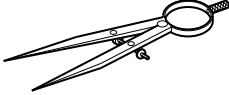
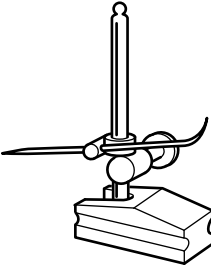
1

2

[2]

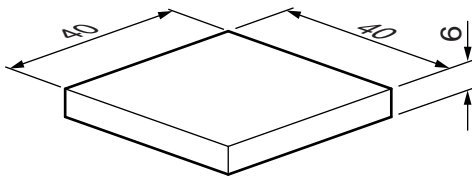
(b) The table below shows a number of tools used when marking-out on metal.

Complete the table by giving the name of each tool and stating what it is used for.
The first one has been done for you.

Tool	Name of tool	Use of tool
	Centre punch	For marking the centre of a hole before drilling
		
		
		

[6]

(c) A $\text{Ø}6$ hole is required in the centre of the square metal blank shown below.



Describe how to find the centre of the blank, and state what tools would be used.

.....

.....

.....

..... [2]

(d) Fig. 3 shows the vice used to hold the square blank for drilling the hole.

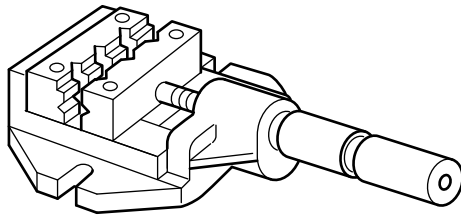


Fig. 3

(i) Tick (✓) to show the correct name for the vice shown in Fig. 3.

Bench vice	Hand vice	Machine vice

[1]

(ii) Explain **two** safety precautions, other than clamping work, that should be taken when using a drilling machine.

1

.....

.....

.....

.....

2

.....

.....

.....

[4]

18 Fig. 4 shows an adjustable jig for bending metal strips.

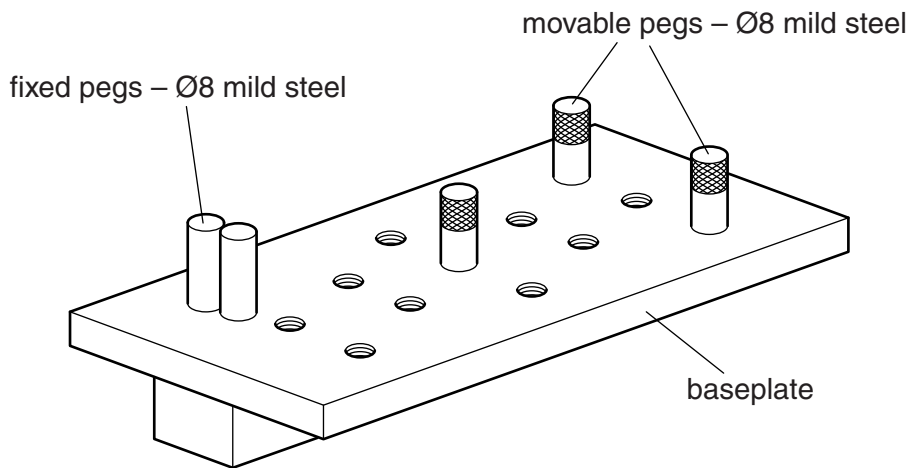


Fig. 4

(a) The fixed pegs are brazed into holes in the baseplate.

Complete the list below to show the stages needed to braze the fixed pegs into the baseplate.

- Stage 1 *Drill the holes for the pegs*
- Stage 2
- Stage 3
- Stage 4
- Stage 5
- Stage 6 *Allow to cool*

[4]

(b) The movable pegs screw into M6 threaded holes in the baseplate.

(i) Tick (✓) to show the size of hole that should be drilled before cutting the M6 thread.

5.0 mm	6.0 mm	7.0 mm
✓		

[1]

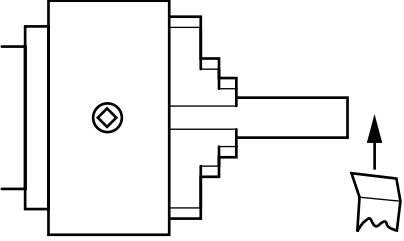
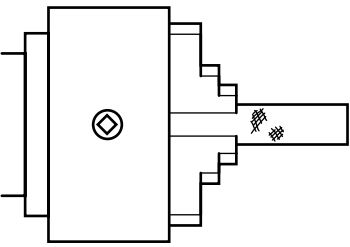
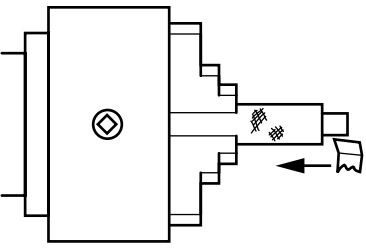
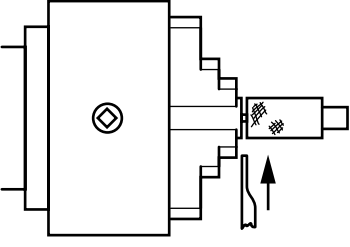
(ii) Name **two** tools needed to cut the M6 threads in the baseplate.

- 1
- 2

[2]

(c) The table below shows processes used to make the movable pegs on a centre lathe.

(i) Complete the table by giving the name of each of the processes shown.

Process	Description of process	Name of process
 <p>The diagram shows a lathe tool cutting across the end of a cylindrical bar. An arrow points to the right, indicating the direction of the cut. A chip is shown being removed from the end of the bar.</p>	<p>Cutting across the end of the Ø8 mild steel bar</p>	
 <p>The diagram shows a lathe tool with a cross-hatched cutting edge applying a grip to the outside of a cylindrical bar. The grip is represented by a series of small, irregular shapes on the surface of the bar.</p>	<p>Putting a grip on the outside of the round bar</p>	
 <p>The diagram shows a lathe tool tapering the diameter of a cylindrical bar. An arrow points to the left, indicating the direction of the cut. The bar is shown with a smaller diameter section.</p>	<p>Making the diameter of the bar smaller for the thread to go on</p>	
 <p>The diagram shows a lathe tool cutting off a finished cylindrical bar. An arrow points to the right, indicating the direction of the cut. The bar is shown with a smaller diameter section.</p>	<p>Cutting off the finished peg</p>	

[4]

(ii) Name **two** materials used to make cutting tools for lathes.

1

2

[2]

(d) Lathes are often Computer Numerically Controlled (CNC).

Name **two** other CNC machines.

1

2

[2]

- 19 Fig. 5 shows a rack for holding round files. The rack is made from acrylic sheet 3mm thick.

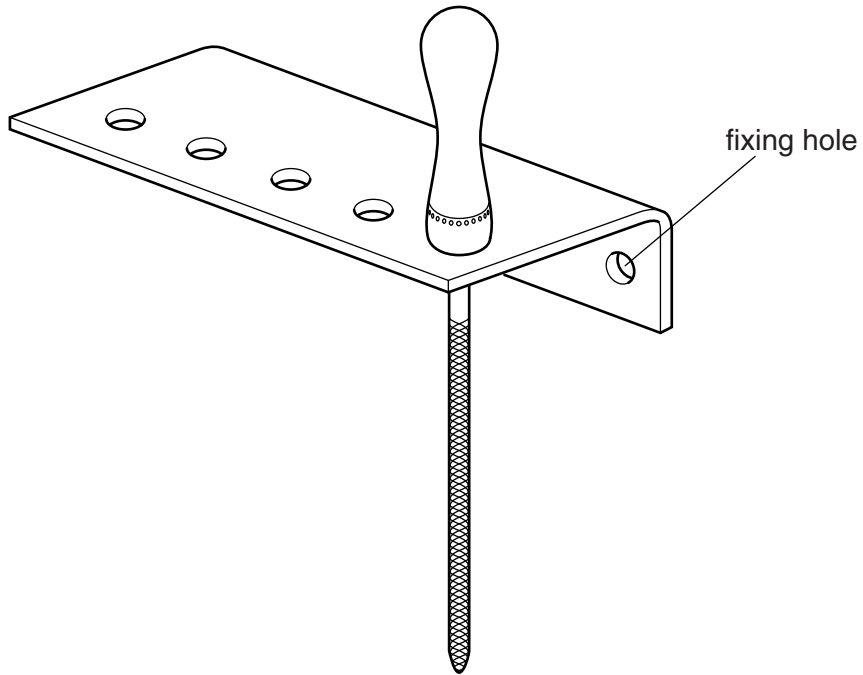


Fig. 5

- (a) Give **two** reasons why acrylic is a suitable material for the file rack.

1

2 [2]

- (b) Acrylic is a thermoplastic.

Name **three** other thermoplastics.

1

2

3 [3]

- (c) When the rack was used, it was found that:
- the rack bends when five files are put in it
 - the files are difficult to get out of the rack.

Use sketches and notes to show how the file rack could be modified to overcome these two problems.

The modified design must use the same thickness acrylic as the original file rack.

[4]

PLEASE DO NOT WRITE ON THIS PAGE



Copyright Information

OCR is committed to seeking permission to reproduce all third-party content that it uses in its assessment materials. OCR has attempted to identify and contact all copyright holders whose work is used in this paper. To avoid the issue of disclosure of answer-related information to candidates, all copyright acknowledgements are reproduced in the OCR Copyright Acknowledgements Booklet. This is produced for each series of examinations and is freely available to download from our public website (www.ocr.org.uk) after the live examination series.

If OCR has unwittingly failed to correctly acknowledge or clear any third-party content in this assessment material, OCR will be happy to correct its mistake at the earliest possible opportunity.

For queries or further information please contact the Copyright Team, First Floor, 9 Hills Road, Cambridge CB2 1GE.

OCR is part of the Cambridge Assessment Group; Cambridge Assessment is the brand name of University of Cambridge Local Examinations Syndicate (UCLES), which is itself a department of the University of Cambridge.